

NAME: _____

DATE: _____

SECTION: _____


SCORE: _____

BASIC SUBTRACTION WORKSHEET


Fill out the box with the right answer.




$6 - 4 =$



$9 - 2 =$



$10 - 4 =$



$7 - 4 =$



$8 - 5 =$