


Fish subtraction


Cross off the fish to find the answers




$$4 - 2 =$$




$$2 - 2 =$$




$$3 - 2 =$$




$$7 - 6 =$$



$$5 - 4 =$$




$$6 - 2 =$$



$$4 - 4 =$$



$$6 - 3 =$$



$$8 - 5 =$$

Fish subtraction


Cross off the fish to find the answers




$$5 - 3 =$$



$$7 - 2 =$$




$$6 - 4 =$$




$$6 - 4 =$$



$$7 - 4 =$$



$$8 - 2 =$$



$$8 - 4 =$$



$$9 - 6 =$$



$$8 - 6 =$$